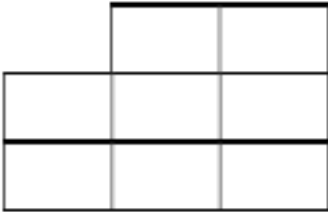
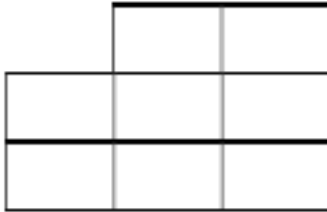
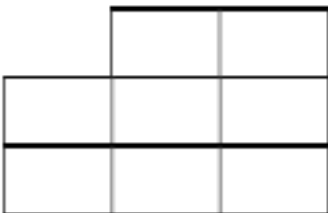
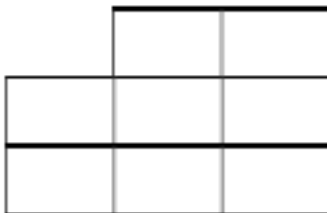


Use the Distributive Property to find the product.

| | |
|----|-----|
| 4. | 6. |
| 8. | 10. |

Use a table to find the product.

| | |
|--|---|
| 12.  | 14.  |
| 16.  | 18.  |

Use the FOIL Method to find the product.

| | |
|-----|-----|
| 22. | 24. |
| 28. | 30. |

Write a polynomial that represents the area of the shaded region.

| | |
|-----|-----|
| 31. | 32. |
|-----|-----|

Find the product of the polynomials.

| | |
|-----|-----|
| 36. | 38. |
| 40. | 42. |